

Summer 2 Week 7 – Answers

Maths

Monday – Arithmetic

A) 12 15
 27 18
 16 21

B) 45 17
 60 56
 113 115

Flashback Four - Monday

1) There are 10 flowers in each bunch.

How many flowers are there altogether?



50

2) The bowl is empty. (full or empty?)







3) The tree is taller than the house. (taller or shorter?)



4) Find the total of 4 and 7. ||

Monday- Time (time to the half hour)

1 Match the clocks to the times.



half past 7

half past 10

half past 1





half past 4

3 Tick the time that matches the clock.

	
<input type="checkbox"/> 6 o'clock	<input type="checkbox"/> 6 o'clock
<input checked="" type="checkbox"/> half past 6	<input checked="" type="checkbox"/> half past 12

Tuesday – Arithmetic

2 Match the clocks to the times.






	
	

8 o'clock

half past 8

half past 3

4 Complete the pattern.

	5 o'clock
	half past <u>5</u>
	6 o'clock
	half past <u>6</u>
	<u>7</u> o'clock

What time comes next?


- A) 10p
60p
15p
32p
40p
18p
24p
36p

- B) 13p
23p
22p
32p
24p
13p
31p
40p
22p
32p
14p
74p

Flashback Four - Tuesday

1) $10 + 10 + 10 + 10 = 40$

2) Complete the sentence.
There are 2 groups of 3 fish.





3) How tall is the bear? 5 cm



4) Subtract 2 from 9 7

Tuesday- Time (writing time)

1 Match the activity to the time it takes.

 eating a sandwich	seconds
 a day at school	minutes

Note: Lines connect 'eating a sandwich' to 'seconds' and 'a day at school' to 'minutes'.

3 Ask a partner to use a timer.

a) How many smiley faces can you draw in 10 seconds?

Various answers

b) What number can you count to in 20 seconds?

Various answers

c) How many star jumps can you do in 1 minute?

Various answers

2 Choose a word to complete the sentences.

seconds

minutes

hours

a) The film lasted for 2 hours.

b) Break time is 20 minutes.

c) Jo can do 5 star jumps in 20 seconds.

4 The toy train goes round the track twice in 3 minutes.



Kim

The train will go round the track more times in 1 hour because hours are longer than minutes.



Ron

The train will go round the track fewer times in 1 hour because 1 is less than 3

Who do you agree with? Kim

Talk about your answers.

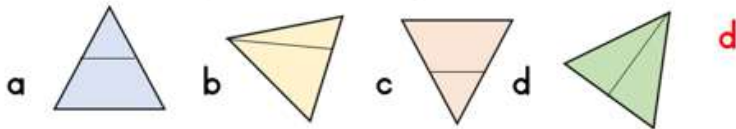
Wednesday – Arithmetic

1	2	3	4	5	6	7	8	9	10
11	12	13	14	15	16	17	18	19	20
21	22	23	24	25	26	27	28	29	30
31	32	33	34	35	36	37	38	39	40
41	42	43	44	45	46	47	48	49	50
51	52	53	54	55	56	57	58	59	60
61	62	63	64	65	66	67	68	69	70
71	72	73	74	75	76	77	78	79	80
81	82	83	84	85	86	87	88	89	90
91	92	93	94	95	96	97	98	99	100

1		3				7			
			14					19	
				25		27	28		30
		33						39	
41									50
51						56			
	62								
				75				79	
		83	84						
	92							99	

Flashback Four - Wednesday

1) Which shape has been split in half?



2) Double 4 is 8



3) How many apples are there? 20



4) 2 more than 15 is 17

Wednesday- Time (comparing time)

1 Tick the longest time in each set.

a) 1 minute 1 second 1 hour ✓

b) 1 week 1 month ✓ 1 day

2 Tick the shortest time in each set.

a) 1 minute 1 second 1 hour

b) 1 week 1 month 1 day

3 Write $>$, $<$ or $=$ to compare the times.

1 day $<$ 1 week

7 days $=$ 1 week

1 month $>$ 1 week

4 Three children ran a race.

Ron



65 seconds

Kim



53 seconds

Sam



60 seconds

Complete the sentences.

a) Kim was the fastest.

b) Ron was the slowest.

c) Kim was faster than Sam.

Thursday – Arithmetic

A) $3+4=7$

$4+3=7$

$7-4=3$

$7-3=4$

$5+3=8$

$3+5=8$

$8-5=3$

$8-3=5$

$1+8=9$

$8+1=9$

$9-1=8$

$9-8=1$

B) $9+4=13$

$4+9=13$

$13-9=4$

$13-4=9$

$13=9+4$

$13=4+9$

$4=13-9$

$9=13-4$

$19-3=16$

$19-16=3$

$16+3=19$

$3+16=19$

$19=3+16$

$19=16+3$

$16=19-3$

$3=19-16$

$8+3=11$

$3+8=11$

$11-8=3$

$11-3=8$

$11=8+3$


$11=3+8$

$3=11-8$

$8=11-3$

Flashback Four - Thursday

1) Draw half of the counters.

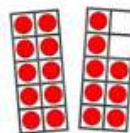


2) 9 strawberries are shared equally onto the plates.
How many will be on each plate?



3

3) $5 + 5 + 5 + 5 = 20$



4) What number is shown?

18

Thursday- Time (topic recap)

1 Colour the time that is 5 hours later than the time shown on the clock.



- Half past 2
- Half past 3
- Half past 4

2 Draw the next clock in the sequence.



The next time in the sequence is:

Half past one

3

Birthday cake	Arrive at the park	Leave the park
Half past four	Half past three	Half past nine

(Red lines connect Birthday cake to Half past three, Arrive at the park to Half past three, and Leave the park to Half past nine.)

4

Bus A



Bus A leaves earlier / later than Bus B.

Bus B



Bus B leaves earlier / later than Bus C.

Bus C



Bus C leaves earlier / later than Bus A.

Bus A leaves earlier / later than Bus C.

Friday- Review of learning



A


1) Complete the missing days of the week.

Friday
Saturday
Sunday
Monday
Tuesday
Wednesday
Thursday

2)

Sort the activities into the groups.

morning  breakfast  go to school

evening  bedtime

3)

Here are the times 3 children spent reading last week.

Teddy



45 minutes

Rosie



2 hours

Amir



54 minutes

Who read for the longest?

Rosie read for the longest.

B

1) Match the times to the clocks.



_____ five o'clock



_____ six o'clock



_____ nine o'clock

3)



Beth:
32 seconds



Mo:
24 seconds



Tam:
27 seconds

2)

Today is Wednesday.

Sam is going to the zoo tomorrow.

What day is Sam going to the zoo?



Sam is going to the zoo on Thursday

Beth is slower / faster than Mo.

Mo is slower / faster than Tam.

Tam is slower / faster than Mo.

Mo is slower / faster than Beth.

C

1) Circle the time shown on the clock.



seven
o'clock

half past
seven

half past
six

2)

Complete the sentences.
Use the words to help you.

My favourite film is about two hours long.

I can write my name in three seconds.

My favourite song is about 3 minutes long.

minutes seconds hours

3) Use the clues to match the statements to each child.



1st



2nd



3rd

My time is
slower than
40 seconds.

My time is 2
seconds
quicker than
35 seconds.


My time is
half way
between 20
and 30
seconds.

Thursday -Su2 Wk 7

Reading Comprehension Answers

'Where the Wild Things are'

1. The author of this text is Maurice Sendak.
2. The story was set in Max's bedroom and in the land of the Wild Things.
3. In his bedroom a forest grew, his ceiling hung with vines and the walls became the world all around.
4. Max got to the land of the Wild Things on his private sailing boat, sailing all day and night taking almost over a year.
5. The Wild Things roared their terrible roar, gnashed their terrible teeth, rolled their terrible eyes and showed their terrible claws.
6. The Wild Things made Max the King of the Wild Things because he tamed them with a magic trick of staring into their yellow eyes without blinking so they were frightened of him.
7. He sent them off without supper because he wanted them to stop having fun and that's what had happened to him.
8. At the end of the story Max sailed back home to his bedroom and his supper was still waiting for him and hot because maybe it had all been in his imagination....



Friday

SPAG Answers- Contractions

Match the contractions to the correct word pairs.

do	not	did	not
don't		didn't	

it	will	she	will
it'll		she'll	

he	will	will	not
he'll		won't	

can	not	has	not
can't		hasn't	

didn't	it'll	hasn't	can't
she'll	won't	he'll	don't